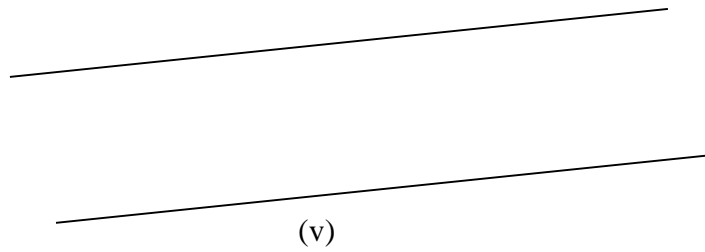
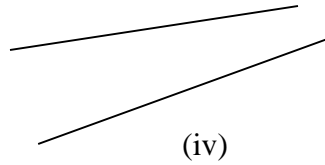
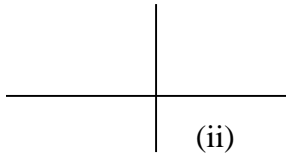
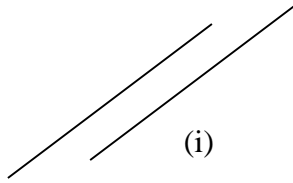


Use the following information to answer the following questions.



1. Identify parallel lines

2. Identify perpendicular lines

3. Identify lines that are neither perpendicular nor parallel lines

4. How could you relate the slopes of parallel lines

5. How would you relate the slopes of perpendicular lines

Answer Keys

Day 106:

1. (i) and (v)
2. (ii) and (iii)
3. (iv)
4. They are equal
5. Their product is -1